

شكراً لتحميلك هذا الملف من موقع المناهج الإماراتية



امتحان 2018 مناهج أبو ظبي

[موقع المناهج](#) ← [المناهج الإماراتية](#) ← [الصف الثاني](#) ← [علوم](#) ← [الفصل الثالث](#) ← [الملف](#)

تاريخ نشر الملف على موقع المناهج: 2019-06-24 10:14:51

التواصل الاجتماعي بحسب الصف الثاني



روابط مواد الصف الثاني على تلغرام

[الرياضيات](#)

[اللغة الانجليزية](#)

[اللغة العربية](#)

[التربية الاسلامية](#)

المزيد من الملفات بحسب الصف الثاني والمادة علوم في الفصل الثالث

أسئلة الامتحان النهائي	1
ملخص شامل لجميع دروس وحدات الفصل وفق الهيكل الوزاري الجديد	2
نموذج إجابة أسئلة امتحان تقويمي	3
نموذج إجابة أسئلة امتحان تقويمي	4
أسئلة امتحان تقويمي	5

Part One

45

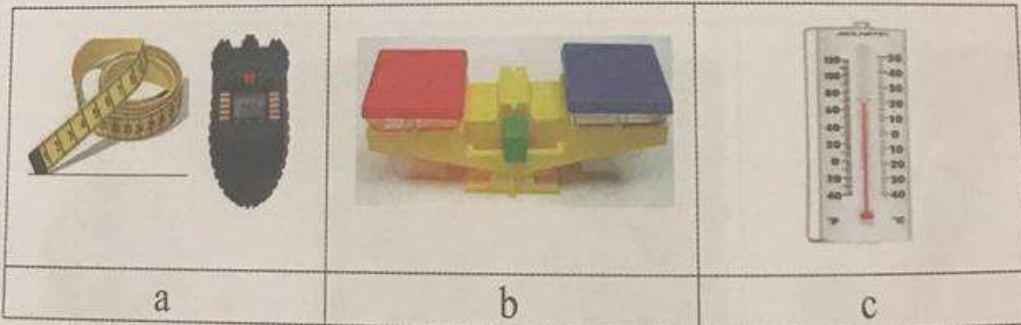
Circle the correct answer (a,b or c) :

1. What does this image describe?


- a. weight
- b. force
- c. position



2. Which of the following is used to measure speed?



3. Which movement indicates ups and downs?



4. What makes a ball speed slow down and stop?

- a. friction
- b. shape
- c. volume



5. How does a fish swim to get to the top of the bowl?

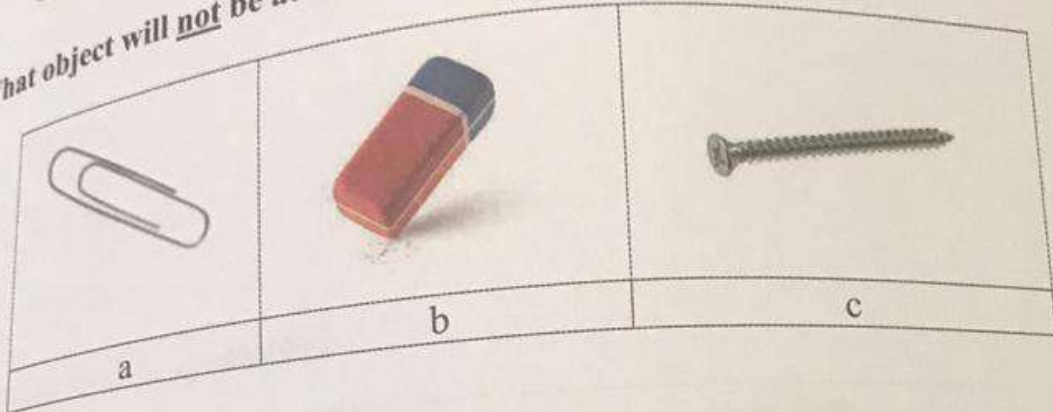
- a. against gravity
- b. with gravity
- c. without gravity



6. Which one of the following is a ramp?

A diagram of a pulley system. A rope is attached to a fixed point, passes over a pulley, and then down to a smaller pulley. A blue arrow points upwards from the smaller pulley, and a red arrow points downwards from the rope.	A photograph showing a person pushing a large, heavy box up a wooden ramp. The ramp is inclined upwards.	A photograph showing a hand using a lever to lift a weight. A blue arrow points upwards from the weight.
<p>a</p>	<p>b</p>	<p>c</p>

7. What object will not be attracted by a magnet?

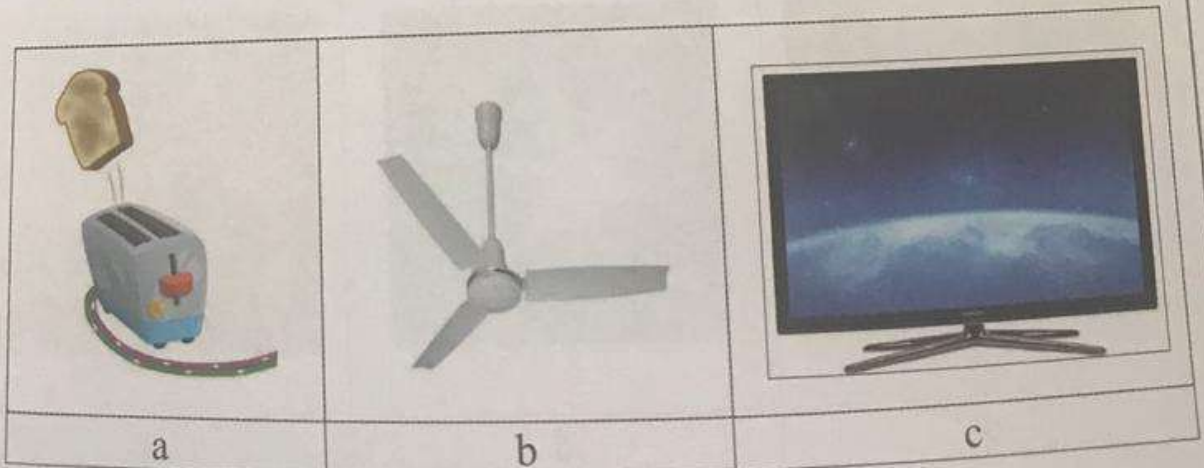


8. Look at picture. What force is the child using to close The door?

- a. pushing
- b. pulling
- c. gravity



9. Which of the following uses electric energy to get heat?

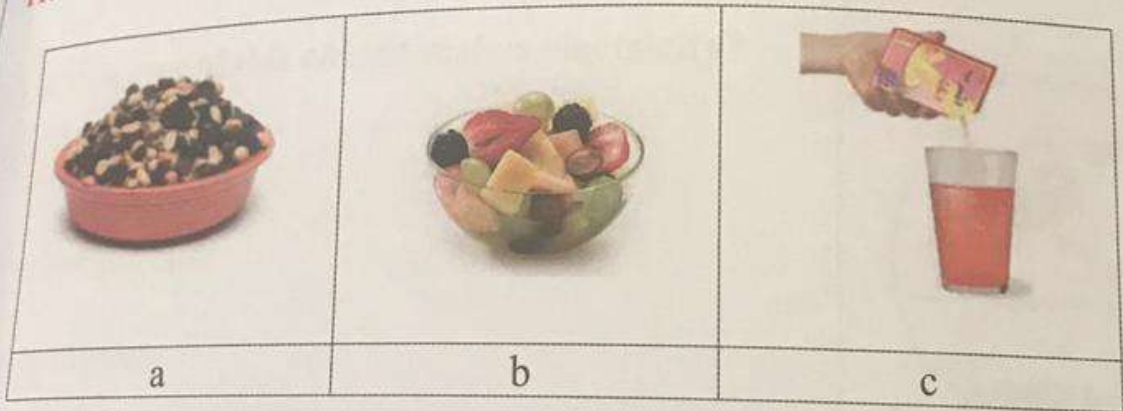


- It is prohibited to photocopy or circulate the exam paper before / during and after the exam through e-mail, social media or any other means; and whoever violates this will be subject to the followed legal proceedings.
- School Administrations, Exam Committees and Marking Centers shall take this into account, monitor violations and take necessary measures


10. Which of these can change matter into different matter?

- a. burning
- b. folding
- c. tearing

11. Which item is a solution?

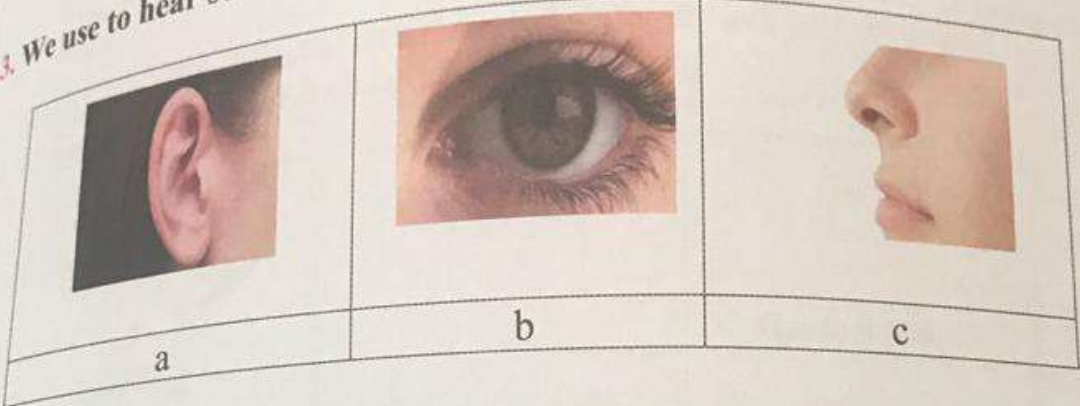


12. Where does most of our heat come from?



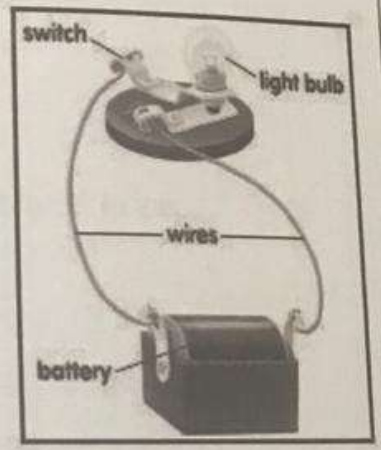
- It is prohibited to photocopy or circulate the exam paper before / during and after the exam through e-mail, social media or any other means; and whoever violates this will be subject to the followed legal proceedings.
- School Administrations, Exam Committees and Marking Centers shall take this into account, monitor violations and take necessary measures

13. We use to hear sounds.....




14. Which part of this circuit makes electricity?

- a. the wires
- b. the light bulb
- c. the battery



15. Which of the following can make light bend?

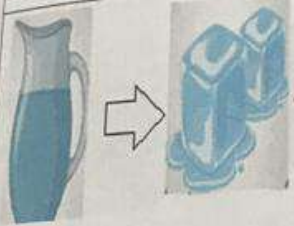


Part Two

16. Look at the pictures on the left. Draw a line from each picture to the words that tell how matter is changing.



Gas to liquid



Liquid to gas



Liquid to solid



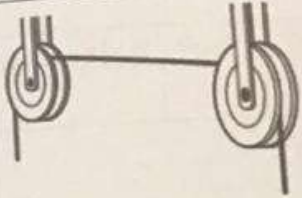


Solid to liquid



- It is prohibited to photocopy or circulate the exam paper before / during and after the exam through e-mail, social media or any other means; and whoever violates this will be subject to the followed legal proceedings.
- School Administrations, Exam Committees and Marking Centers shall take this into account, monitor violations and take necessary measures

17. Look at the chart below. Write the name of machine shown in the space beneath each picture

Simple Machines		
		
.....

18. Write the type matter change (physical or chemical) under the image

			
.....

Read the following sentences, then write true (T) or false (F) between brackets.

19. () A balance measures the mass.
20. () The farther a magnet is away from an object, the stronger the magnets attraction.
21. () The pull of a magnet strongest is at the poles.
22. () Changing the size and shape of the matter is a physical change .
23. () Sounds are different in pitch.
24. () Most light on Earth comes from the moon .
25. () Lightning is static electricity .
26. ()The tool used to measure temperature is thermometer.

Write the word that best complete each sentence in the spaces below. Words may be used only once.

gravity	vibrate	magnet	reflect	evaporation	fuel	friction
---------	---------	--------	---------	-------------	------	----------

27. Sound is made when objects.....
28. We can see the objects because of the light they.....
29. Objects fall to the floor because of force called.....
30. The force that slows down moving things is called.....
31. can take a part a mixture of sand and iron filings.
32. can take a part a solution of salt and water.
33. Something that gives off heat when it burns is called

End of exam