

تم تحميل هذا الملف من موقع المناهج الإماراتية



*للحصول على أوراق عمل لجميع الصفوف وجميع المواد اضغط هنا

<https://almanahj.com/ae>

* للحصول على أوراق عمل لجميع مواد الصف السادس اضغط هنا

<https://almanahj.com/ae/6>

* للحصول على جميع أوراق الصف السادس في مادة علوم ولجميع الفصول, اضغط هنا

<https://almanahj.com/ae/6science>

* للحصول على أوراق عمل لجميع مواد الصف السادس في مادة علوم الخاصة بـ الفصل الثالث اضغط هنا

<https://almanahj.com/ae/6science3>

* لتحميل كتب جميع المواد في جميع الفصول للـ الصف السادس اضغط هنا

<https://almanahj.com/ae/grade6>

للتحدث إلى بوت المناهج على تلغرام: اضغط هنا

https://t.me/almanahj_bot

Choose the correct answer - A, B, C or D

1. Horses only eat plants. Which of the following would be used to describe a horse?
- (A) Decomposer
 - (B) Omnivore
 - (C) Carnivore
 - (D) Herbivore**
2. A lion eats only meat (animals). Which of the following would be used to describe a lion?
- (A) Decomposer
 - (B) Omnivore
 - (C) Carnivore**
 - (D) Herbivore
3. A bear eats both plants and animals. Which of the following would be used to describe a bear?
- (A) Decomposer
 - (B) Omnivore**
 - (C) Carnivore
 - (D) Herbivore



4. Bacteria breaks down dead plant and animal material. Which of the following would be used to describe bacteria?

(A) Decomposer

(B) Omnivore

(C) Carnivore

(D) Herbivore

5. Which of the following would be described as a producer?

(A) Lion

(B) Horse

(C) Bear

(D) Plant

6. A consumer is an animal that makes its own food:

(A) True

(B) False

7. Plants → Caterpillar → Birds is example of:

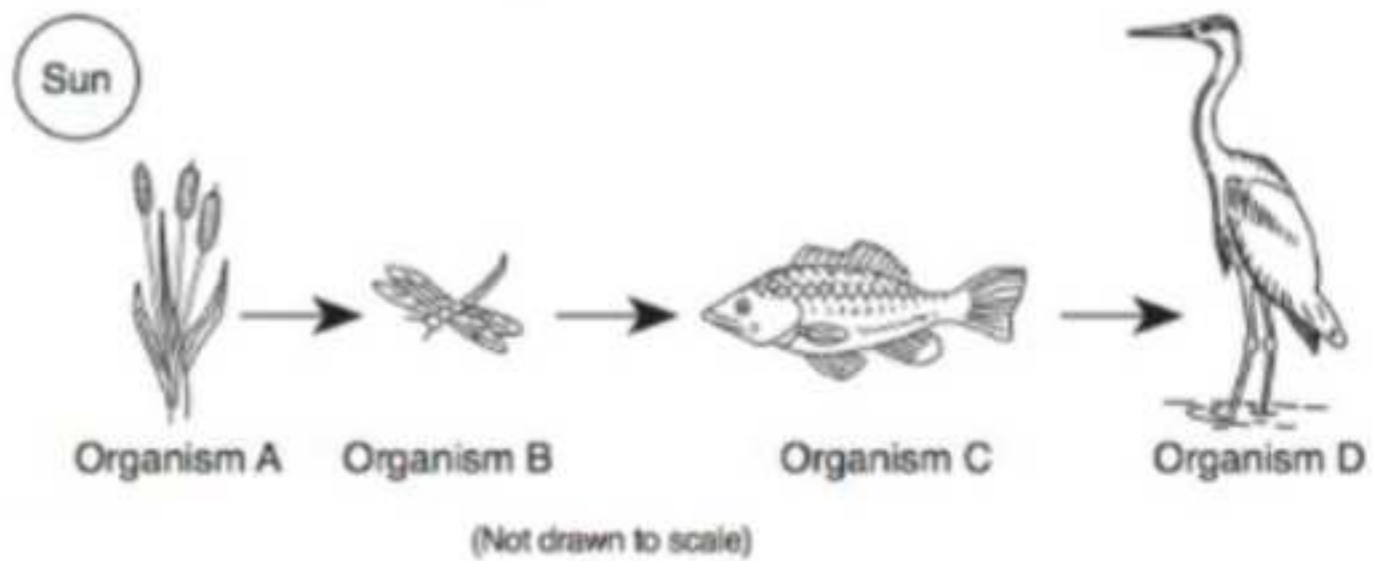
(A) A food web

(B) A food chain

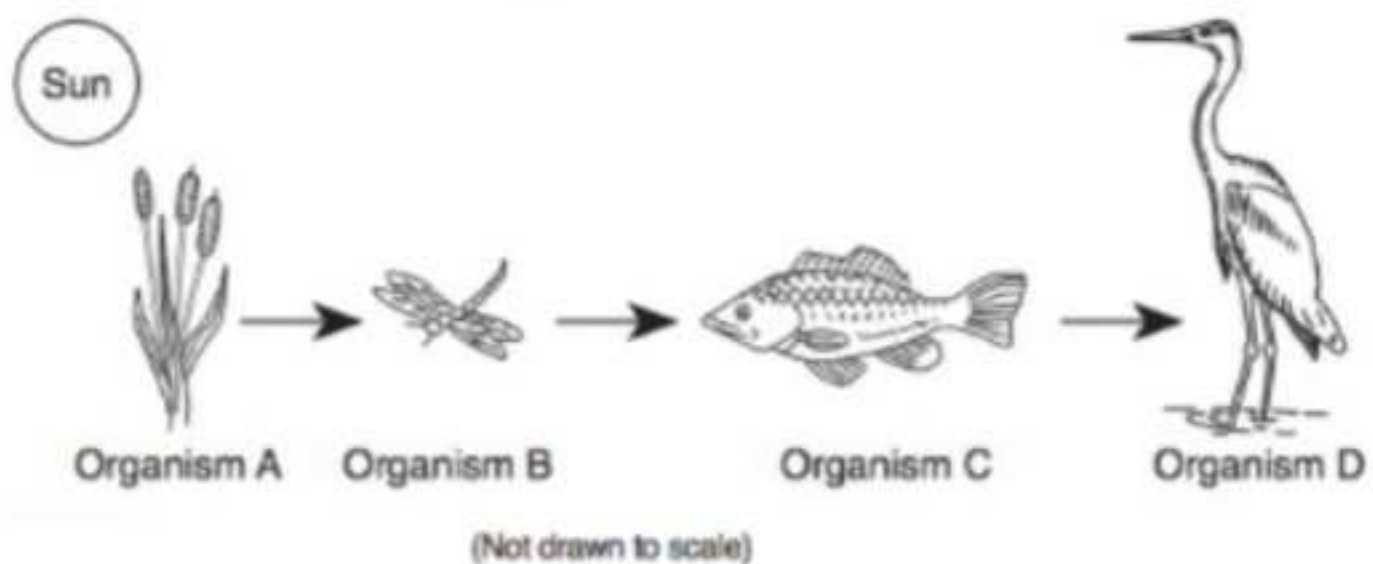
(C) Food cycle

(D) Ecosystem

11. The figure below shows a food chain. Which of the organisms would be described as a secondary consumer?



- (A) Organism A
 - (B) Organism B
 - (C) Organism C**
 - (D) Organism D
12. The figure below shows a food chain. Which of the organisms would be described as an herbivore?



- (A) Organism A
- (B) Organism B**
- (C) Organism C
- (D) Organism D

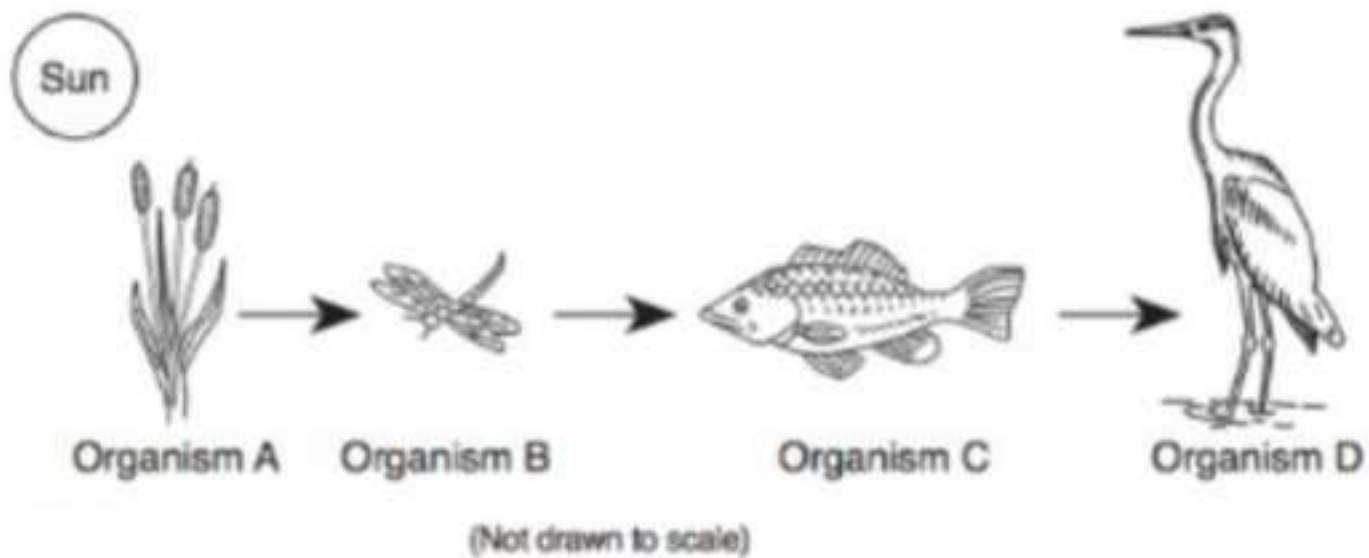
8. Organisms which feed on secondary consumers are called:

- (A) Producers
- (B) Herbivores
- (C) Primary consumers
- (D) Tertiary consumers**

9. Organisms which feed on producers are called:

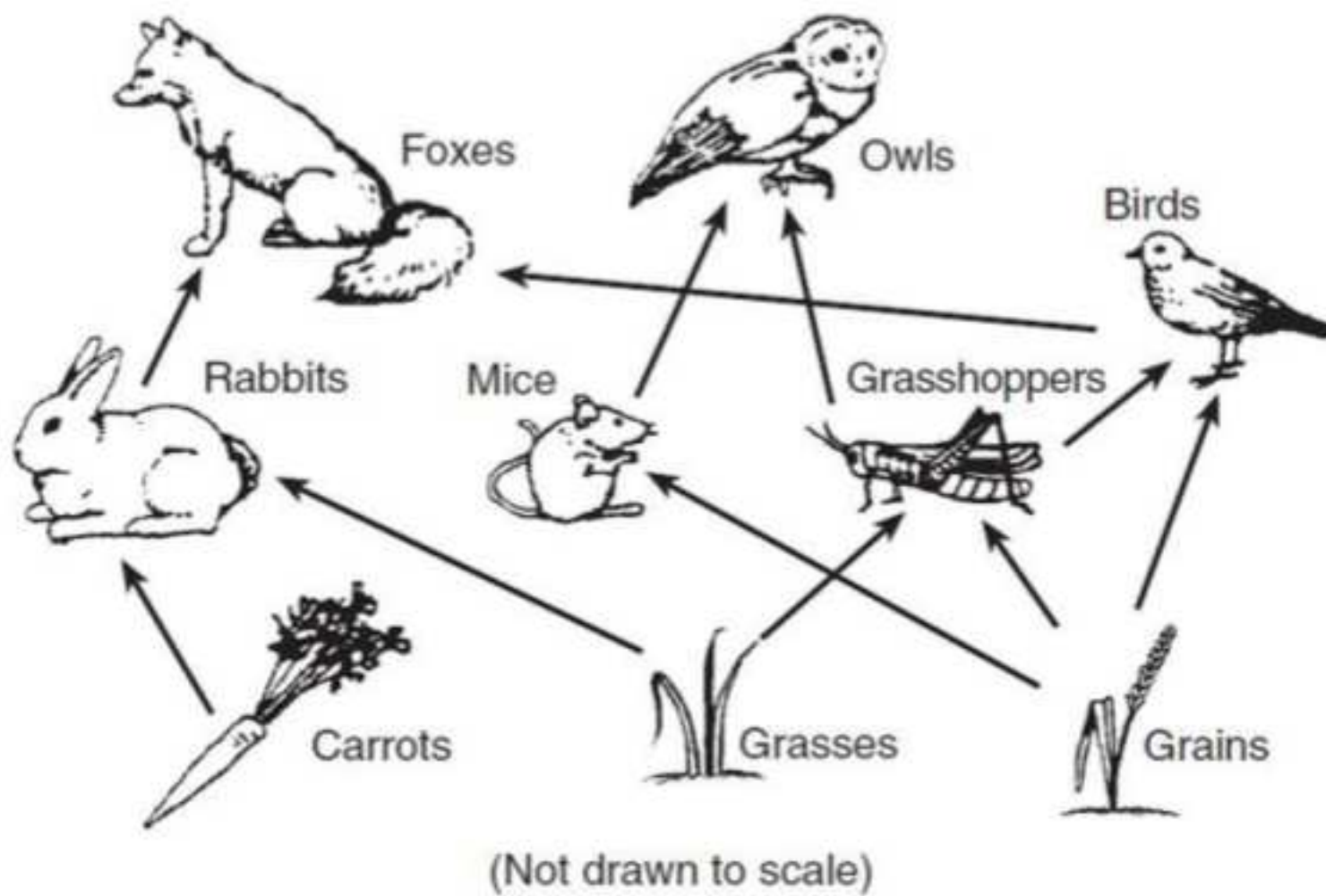
- (A) Secondary consumers
- (B) Carnivores
- (C) Primary consumers**
- (D) Tertiary consumers

10. The figure below shows a food chain. Which of the organisms would be described as a producer? 8 / 8



- (A) Organism A**
- (B) Organism B
- (C) Organism C
- (D) Organism D

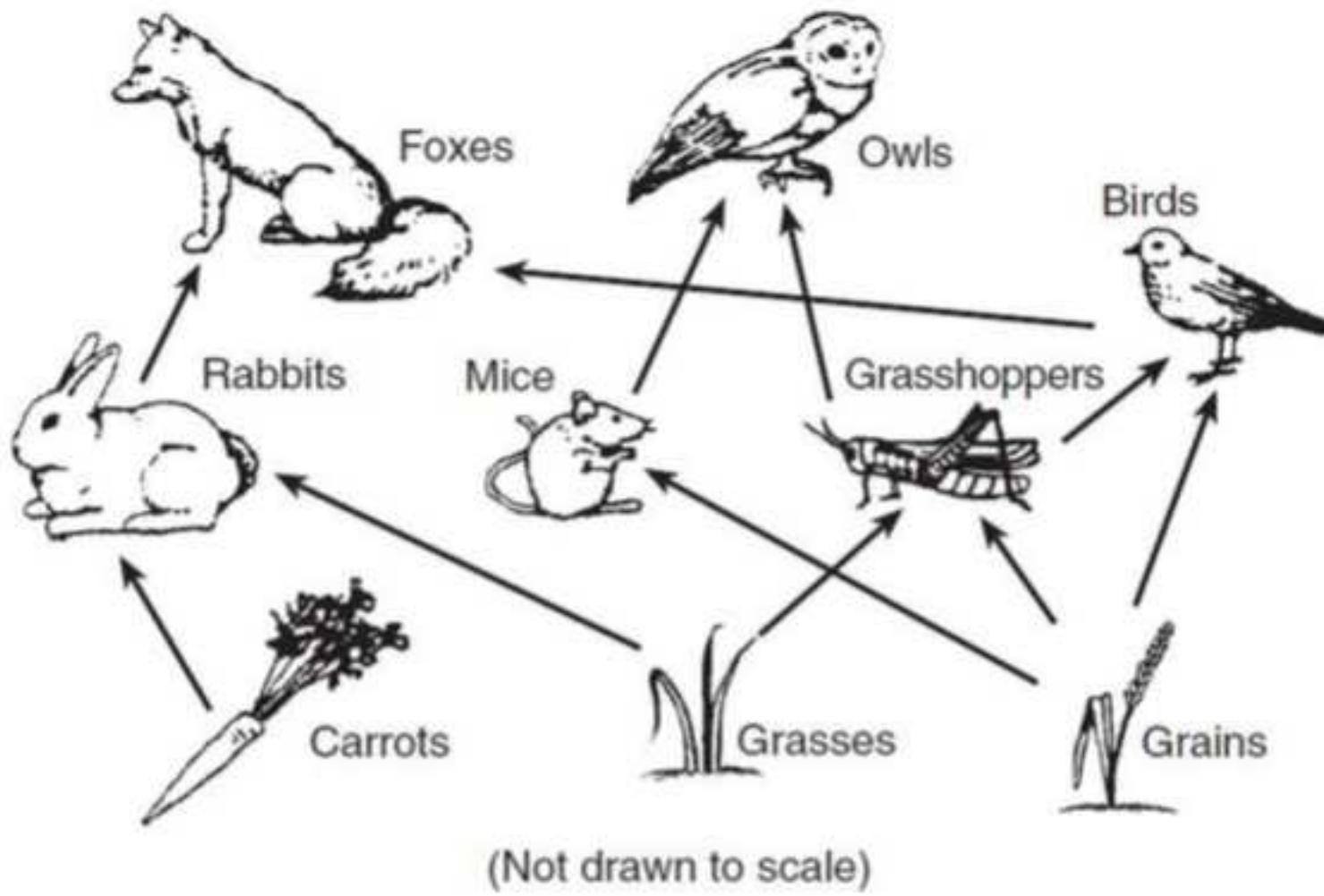
4. The figure below shows a food web. Which of the following would be a food chain from this food web?



- (A) Carrots → Mice → Owls
- (B) Rabbits → Foxes → Birds
- (C) Grains → Mice → Owls**
- (D) Grasses → Grasshoppers → Grains

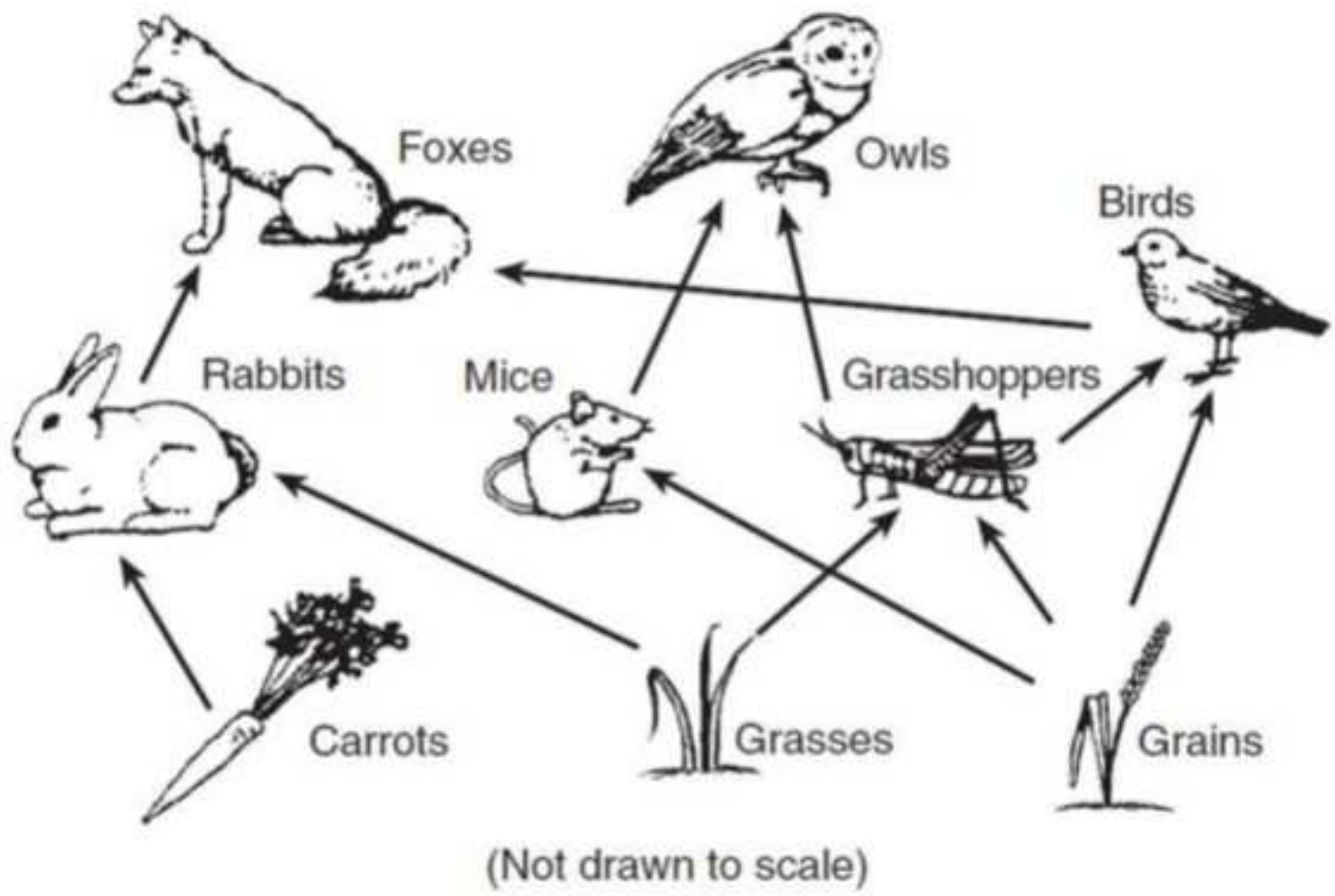


3. The figure below shows a food web. Which of the organisms would be described as an omnivore?



- (A) Carrots
- (B) Rabbits
- (C) Foxes
- (D) Birds**

15. The figure below shows a food web. Which of the following would be described as a producer?



- (A) Carrots
- (B) Grasses
- (C) Grains
- (D) All of the above**