

تم تحميل هذا الملف من موقع المناهج الإماراتية



الملف أوراق عمل شاملة باللغة الإنجليزية

[موقع المناهج](#) ← [المناهج الإماراتية](#) ← [الصف السادس](#) ← [رياضيات](#) ← [الفصل الثاني](#)

روابط مواقع التواصل الاجتماعي بحسب الصف السادس



روابط مواد الصف السادس على تلغرام

[الرياضيات](#)

[اللغة الانجليزية](#)

[اللغة العربية](#)

[التربية الاسلامية](#)

المزيد من الملفات بحسب الصف السادس والمادة رياضيات في الفصل الثاني

دليل المعلم للفصل الثاني كامل	1
كل ما يخص الاختبار التكويني لمادة الرياضيات للصف السادس يوم الأحد 9/2/2020	2
تحميل دليل المعلم للفصل الثاني منهج انجليزي	3
تحميل دليل المعلم للفصل الثاني الوحدة الخامسة الأعداد الكلية والمستوى الإحاثي	4
المراجعة النهائية لامتحان نهاية الفصل الثاني	5

MATHEMATICS

Circle the correct answer (1 Mark Each)

1. The fraction $\frac{5}{6}$ can be represented by this expression.

$$\frac{1}{6} + \frac{2}{6} + \square$$

Which fraction belongs in the \square to complete the expression?

A. $\frac{2}{6}$

B. $\frac{3}{6}$

C. $\frac{1}{6}$

D. $\frac{6}{6}$

2. What number goes in the box to make the answer correct.

$$45 \times \square = 145$$

A. 1

B. 2

C. 4

D. 9

3. Which of these represent the **number 457**?

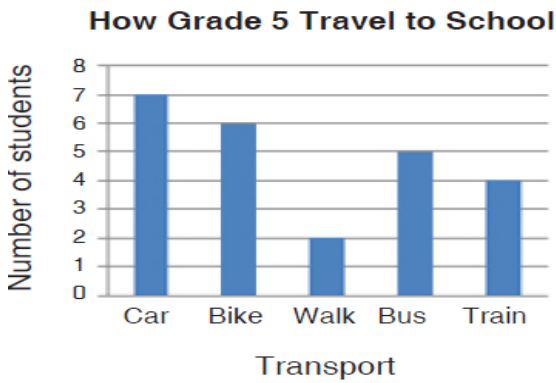
A. $800 + 50 - 70$

B. $800 + 5 - 7$

C. $100 + 300 + 50 + 10 + 7$

D. $800 + 300 + 60 + 70$

4. Students in grade 5 were asked how they travel to school each day. The results are seen in the graph.



How many students travel by train?

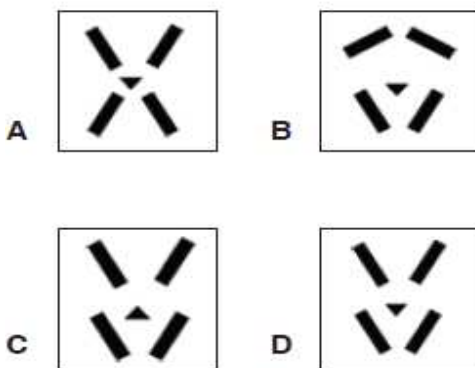
- A 4 B 5
C 6 D 7
5. Which of these is not a factor of 12?
- A. 2
B. 4
C. 6
D. 8

6. Nayla's radio has this kind of plug



She has to put the plug into a socket.

Which socket will the plug fit into?



7. What is your answer when **165 is divided by 15**?

- A. 10
- B. 11
- C. 12
- D. Not here

8. This table shows the number of stickers given to students in the Dolphins Reading Group.

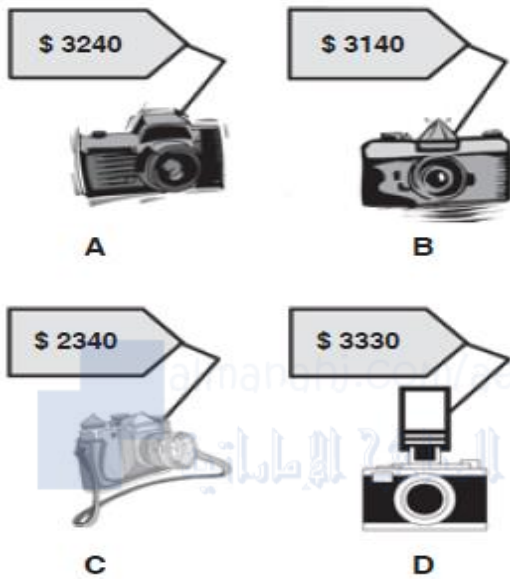
Dolphins Reading Group	
Salma	● ● ● ● ● ● ● ●
Mustafa	● ● ● ● ● ● ● ●
Roshan	● ● ● ● ● ● ● ●
Eshita	● ● ● ● ● ● ● ● ● ●
Kiah	● ● ● ● ● ● ● ●
Aida	● ● ● ● ● ● ● ● ● ● ● ●
Taj	● ● ● ● ● ● ● ● ● ●

Which one of these statements is true?

- A** Taj has the most stickers.
 - B** Three students have an equal number of stickers.
 - C** Roshan has half as many stickers as Eshita.
 - D** Aida has twice as many stickers as Kiah.
9. Which statement about the number 726,483.19 is true?
- A. The digit 9 has a value of (9×100)
 - B. The digit 4 has a value of (4×100)
 - C. The digit 8 has a value of (8×0.1)
 - D. The digit 2 has a value of (2×10)

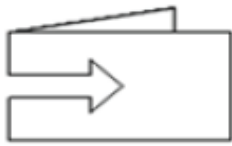
10. In which table are Salah bought a camera that was \$900 more than the cheapest one shown?

Which camera did he buy?

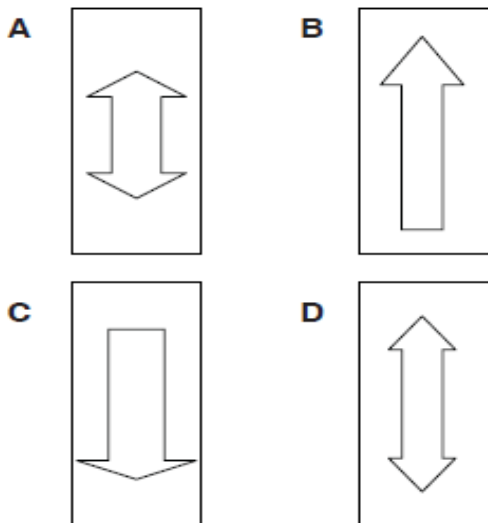


11.

Mohit cut a shape out of a piece of folded paper.



Which of these shows the shape when the paper is unfolded?



12. A football player scores 15 goals every season. How many goals did he score in 20 years?

- A. 150
- B. 300
- C. 450
- D. 600

13. What time is showing on this clock?



- A 3:40 B 4:40
- C 3:08 D 8:20

14.

What fraction of 100 is 5?

- A $\frac{5}{10}$ B $\frac{1}{5}$
- C $\frac{1}{20}$ D $\frac{1}{50}$

15.



What fraction of this rectangle is shaded?

- A 0.3 B 0.03
- C 3.0 D 3.3