

تم تحميل هذا الملف من موقع المناهج الإماراتية



\*للحصول على أوراق عمل لجميع الصفوف وجميع المواد اضغط هنا

<https://almanahj.com/ae>

\* للحصول على أوراق عمل لجميع مواد الصف السابع اضغط هنا

<https://almanahj.com/ae/7>

\* للحصول على جميع أوراق الصف السابع في مادة علوم ولجميع الفصول, اضغط هنا

<https://almanahj.com/ae/7science>

\* للحصول على أوراق عمل لجميع مواد الصف السابع في مادة علوم الخاصة بـ الفصل الثاني اضغط هنا

<https://almanahj.com/ae/7science2>

\* لتحميل كتب جميع المواد في جميع الفصول للـ الصف السابع اضغط هنا

<https://almanahj.com/ae/grade7>

للتحدث إلى بوت المناهج على تلغرام: اضغط هنا

[https://t.me/almanahj\\_bot](https://t.me/almanahj_bot)



REVIEW LESSON



13. Analyzing the Human Population

## ATTEMPT 3

---

Select your answer from the drop-down menu.

A(n) population is the number of individuals of the same species that live in a certain area at the same time.

Which factors caused the human population to increase?

ATTEMPT 1

decreased birth rates

less access to clean water

more access to clean water resources ✓

more access to better health care ✓

less access to improved health care

less access to technology

Which of the following is a group of organisms with similar characteristics?



ATTEMPT 1

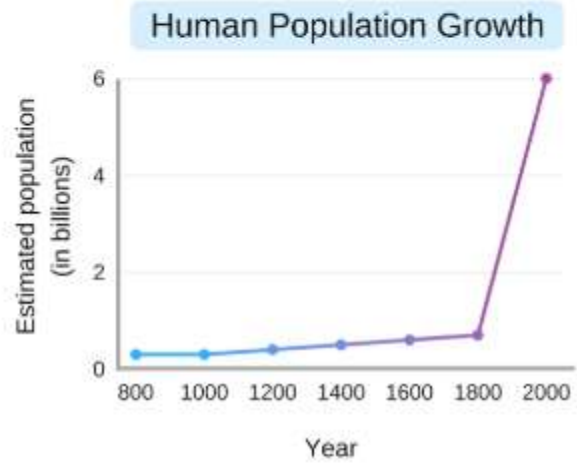
resources

species ✓

population

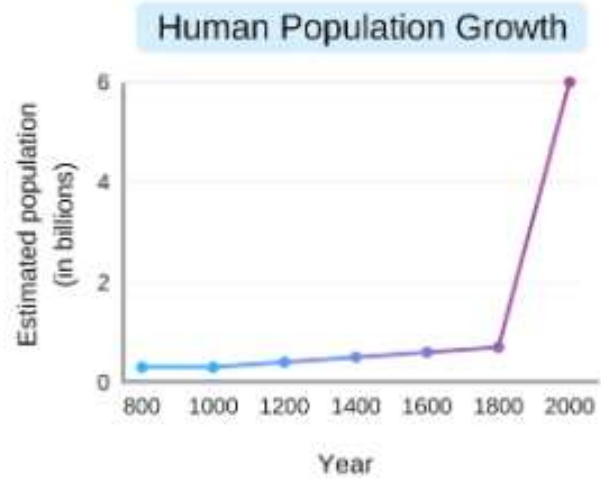
community

Fill in the blank with the correct answer to complete the sentence.



Word Bank			
800	1600	1800	2000

During the s, there was a population explosion and the population increased sharply.



Word Bank			
decreased	increased	stopped	stayed the same

Based on the graph, the human population **1. increased** slightly until the 1800s.

What effect did more access to clean water resources and better health care have on the human population?

ATTEMPT 1



More access to resources caused lower birth rates.



More access to resources caused species extinction.



More access to resources allowed people to live longer. ✓



More access to resources had no effect on the human population.



Which of the following is true about the two animals pictured below?



ATTEMPT 1

They make up the same population.

They are different species. ✓

They are the same species.

They are the same species that make up different populations.

What is the current estimated human population on Earth?



ATTEMPT 1

around 2 billion

around 1 million

over 7 billion ✓

around 5 million

What do all organisms on Earth belong to?

ATTEMPT 3

live groups



the same species



carrying capacities

specific populations



## ATTEMPT 1

---

Select your answer from the drop-down menu.

1. Carrying capacity ✓ ▼ is the maximum population size that can be supported by an area's resources over time.

---

Which of the following is one way that plants are used as a resource on Earth?



ATTEMPT 1



Plants can be used as a replacement for uranium in electricity production.



Plants can be used for mining minerals.



Plants are used in metal production.



Plants can be used to make clothing. ✓

When referring to carrying capacity, which of the following are meant by an area's resources?

ATTEMPT 1

available wind

available books

available space ✓

available clean water ✓

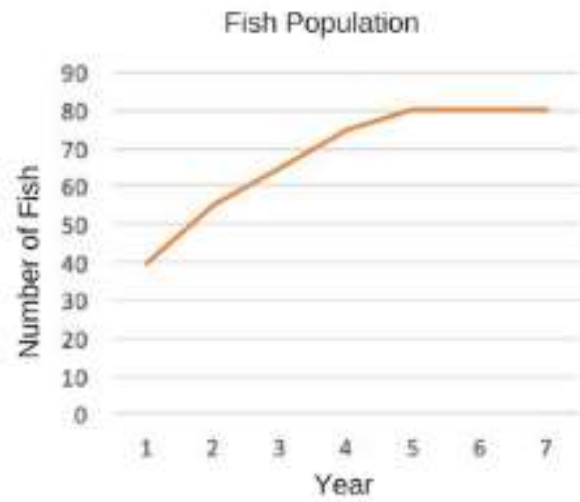
available rain

available roadways

available sunlight

available shelter ✓

In which year did the lake reach its carrying capacity?



ATTEMPT 1

year 2

year 1

year 4

year 5

Water in your home is heated using fossil fuels. What effect does burning fossil fuels have on the environment?



ATTEMPT 1

Burning fossil fuels pollutes land, air, and water resources. ✓

Burning fossil fuels only pollutes water resources.

Burning fossil fuels causes a population explosion.

Burning fossil fuels does not impact the environment.



What are some ways that water is used as a resource on Earth?



ATTEMPT 1

Water is used for transportation. ✓

Water is used to fill car tires.

Water is used to make laptops.

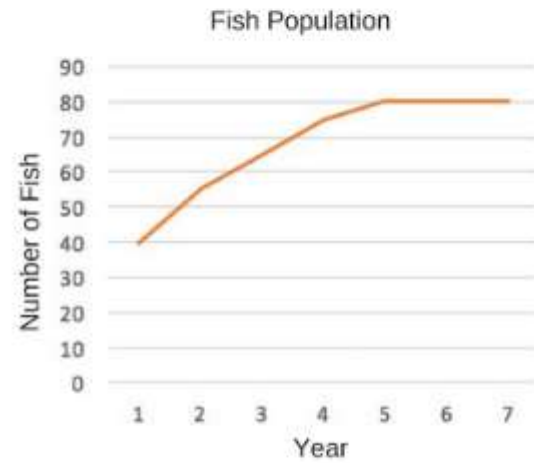
Water is used for agriculture. ✓

Water is used to make cars.

Water is used in electronic devices.

**ATTEMPT 1**

Fill in the blank with the correct answer to complete the sentence.



Word Bank			
1	4	5	7

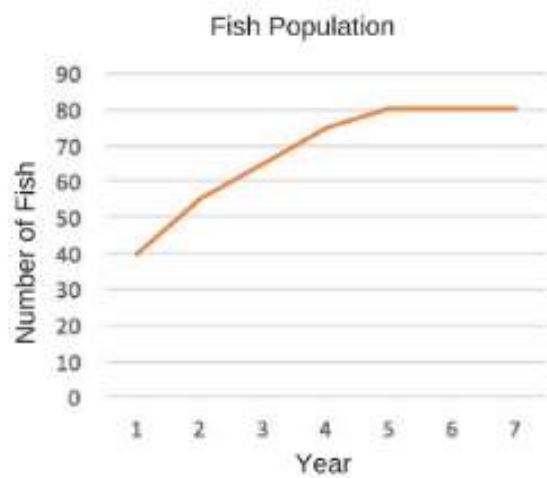
The population of fish in the lake was the lowest in year

1. 1



## ATTEMPT 1

Select your answer from the drop-down menu.



The carrying capacity of the lake is  fish.

## ATTEMPT 1

---

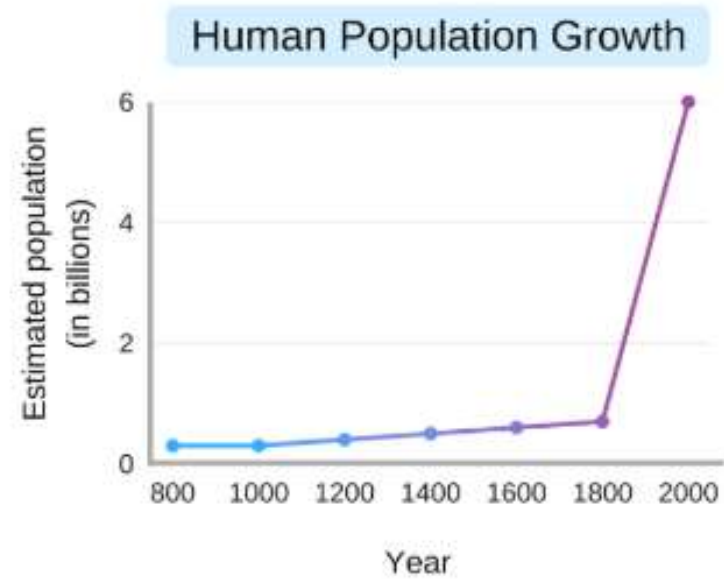
Select your answer from the drop-down menu.



1. Food   is an example of an area's resources that can be affected by carrying capacity.

---

What happened to the human population after the year 1800?



The population increased sharply. ✓

The population increased slightly and suddenly decreased.

The population stayed the same.

The population decreased.

Select your answer from the drop-down menu.

Humans are only one type of **population** on Earth.

Which of the following can cause pollution?

minerals

soil

water

chemicals ✓

People use Earth's resources for daily activities. What does this have a large impact on?

your home

the galaxy

the environment



the atmosphere only