


## شكراً لتحميلك هذا الملف من موقع المناهج الإماراتية



## مراجعة نهائية وفق الهيكل الوزاري - ريفيل

[موقع المناهج](#) ← [المناهج الإماراتية](#) ← [الصف السابع](#) ← [رياضيات](#) ← [الفصل الثاني](#) ← [الملف](#)

## التواصل الاجتماعي بحسب الصف السابع



## روابط مواد الصف السابع على تلغرام

[الرياضيات](#)

[اللغة الانجليزية](#)

[اللغة العربية](#)

[التربية الاسلامية](#)

## المزيد من الملفات بحسب الصف السابع والمادة رياضيات في الفصل الثاني

<a href="#">دليل تصحيح أسئلة الامتحان الورقي - بريدج</a>	1
<a href="#">أسئلة الامتحان النهائي - بريدج</a>	2
<a href="#">حل مراجعة الوحدة السابعة الأشكال الهندسية - ريفيل</a>	3
<a href="#">حل مراجعة الوحدة السادسة المعادلات - ريفيل</a>	4
<a href="#">مراجعة نهائية وفق الهيكل الوزاري - ريفيل</a>	5



مجلس 7



مؤسسة الإمارات للتعليم المدرسي  
EMIRATES SCHOOLS ESTABLISHMENT

Grade 7  
Term 2 Revision

**EoT Exam Coverage**  
**Module 5 - 8**  
Mathematics/Reveal

مجلس 4



مؤسسة الإمارات للتعليم المدرسي  
EMIRATES SCHOOLS ESTABLISHMENT

**Part (1)**

**10 main questions**

**3 Marks per main question**

**MCQ**



Simplify each expression.

**3.**  $-y + 9z - 16y - 25z + 4$

---

---

---

---

---

---

---

**4.**  $8z + x - 5 - 9z + 2$

---

---

---

---

---

---

---

**5.**  $5c - 3d - 12c + d - 6$

---

---

---

---

---

---

---

Simplify each expression.

6.  $-\frac{3}{4}x - \frac{1}{3} + \frac{7}{8}x - \frac{1}{2}$

---

---

---

---

---

---

---

7.  $\frac{1}{4} + \frac{9}{10}y - \frac{3}{5}y + \frac{7}{8}$

---

---

---

---

---

---

---

8.  $-\frac{1}{2}a + \frac{2}{5} + \frac{5}{6}a - \frac{1}{10}$

---

---

---

---

---

---

---

Add.

**1.**  $(8x + 9) + (-6x - 2)$

---

---

---

---

---

---

---

**2.**  $(5x + 4) + (-8x - 2)$

---

---

---

---

---

---

---

**3.**  $(-7x + 1) + (4x - 5)$

---

---

---

---

---

---

---

Solve each equation. Check your solution.

**1.**  $6 + y = -8$

**2.**  $-12 = 4 + c$

**3.**  $p - 11 = -5$

**4.**  $12 = z - 8$

Factor each expression. If the expression cannot be factored, write cannot be factored

**7.**  $5x + 35$

---

---

---

---

---

---

---

---

**8.**  $8x - 14$

---

---

---

---

---

---

---

---

**9.**  $3x + 11y$

---

---

---

---

---

---

---

---



Factor each expression. If the expression cannot be factored, write cannot be factored

**10.**  $32x - 15$

---

---

---

---

---

---

---

---

**11.**  $72x - 18xy$

---

---

---

---

---

---

---

---

**12.**  $45xy - 81y$

---

---

---

---

---

---

---

---

Solve each equation. Check your solution.

5.  $-7x = 56$

---

---

---

---

---

---

---

---

6.  $-20 = -5b$

---

---

---

---

---

---

---

---

7.  $\frac{d}{-9} = -6$

---

---

---

---

---

---

---

---

Solve each inequality. Graph the solution set on a number line.

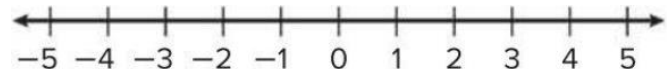
**1.**  $x + 5 < 7$

---

---

---

---



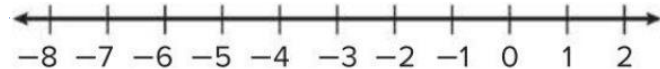
**2.**  $1 > x + 6$

---

---

---

---



**3.**  $x + 8 \geq 14$

---

---

---

---



Solve each inequality. Graph the solution set on a number line.

4.  $5 \leq x + 12$



5.  $x + 5.4 < -1.6$



6.  $x + 7.5 > -2.5$



Solve each inequality. Graph the solution set on a number line.

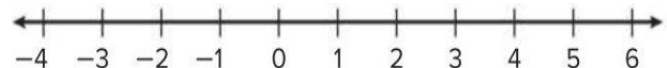
1.  $3x > 12$

---

---

---

---



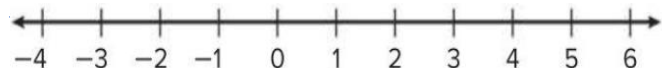
2.  $60 \geq 12x$

---

---

---

---



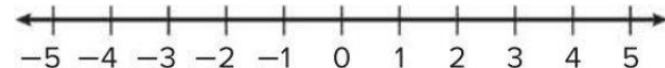
3.  $-14 \geq 7x$

---

---

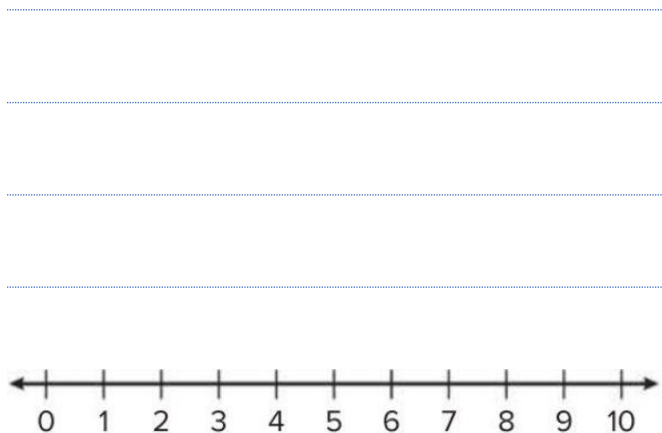
---

---

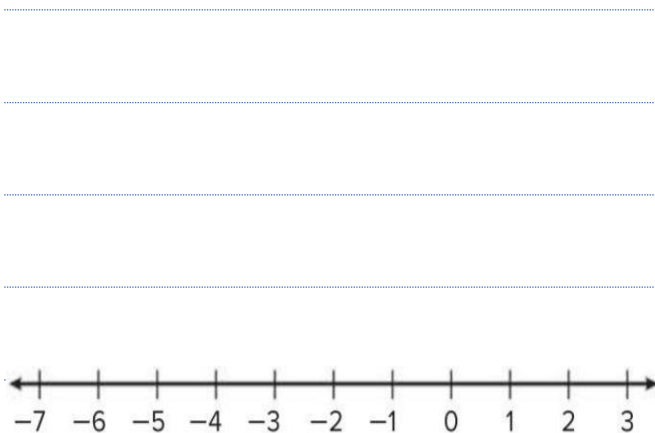


Solve each inequality. Graph the solution set on a number line.

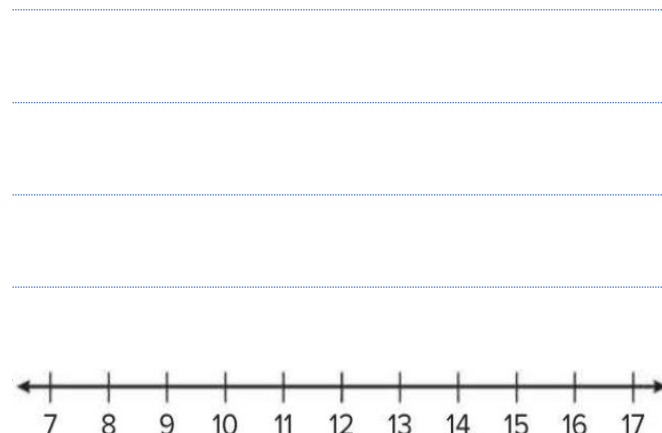
4.  $2 \leq 0.25x$



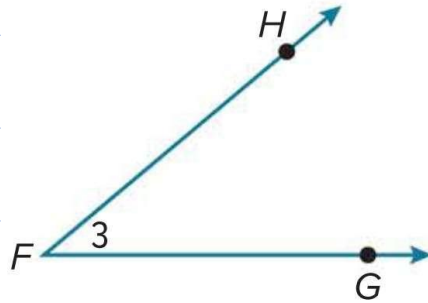
5.  $1.1x < -4.4$



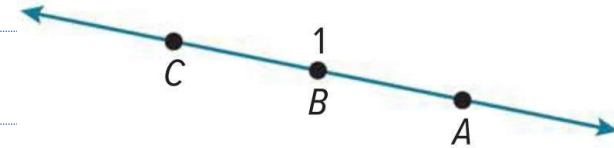
6.  $\frac{x}{6} \geq 2$



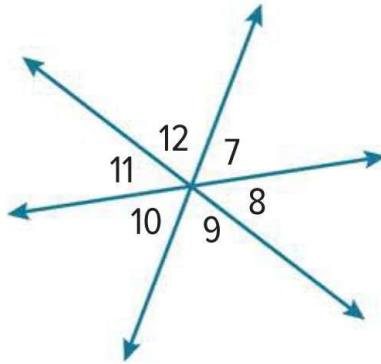
1. Name the angle in four ways.



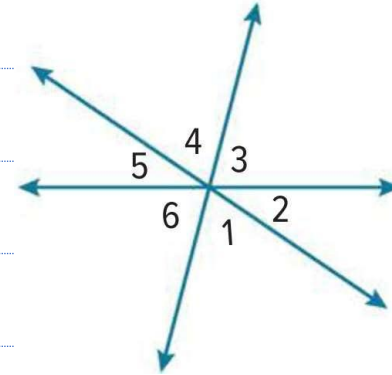
2. Name the angle in four ways.



3. Refer to the diagram below. Identify three pairs of vertical angles. Name all the angles that are adjacent to  $\angle 10$

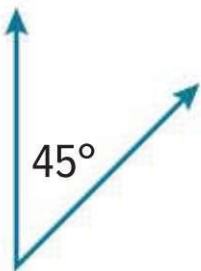
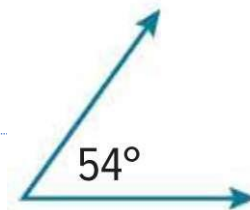


4. Identify three pairs of vertical angles. Name all the angles that are adjacent to  $\angle 3$ .





Give the measure of the angle that is complementary to the given angle.

**1.****2.****3.**

Give the measure of the angle that is supplementary to the given angle.

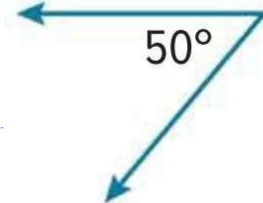
4.



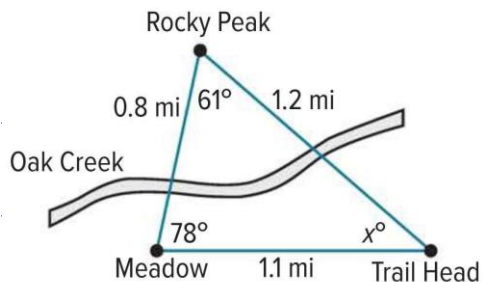
5.



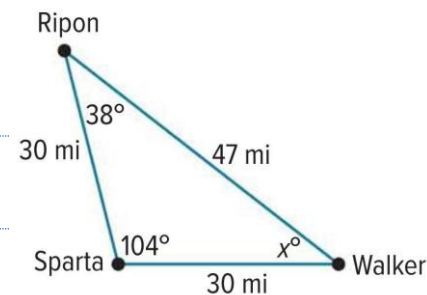
6.



**9.** The figure shows the Oak Creek trail, which is shaped like a triangle. Solve the equation  $61 + 78 + x = 180$  to find the value of  $x$  in the figure. Then classify the triangle by its angles and by its sides.



**10.** The three towns of Ripon, Sparta, and Walker form a triangle as shown. Solve the equation  $38 + 104 + x = 180$  to find the value of  $x$  in the triangle. Then classify the triangle by its angles and by its sides.



**11. Reason Abstractly** Without drawing the triangle, how do you know a triangle with a  $95^\circ$  angle, a  $95^\circ$  angle, and a 5-inch side is not possible?

---

---

---

---

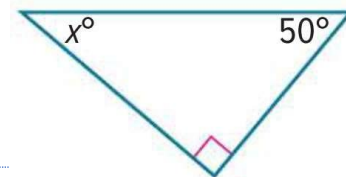
---

---

---

---

**12.** Find the value of  $x$  in the diagram. Then, find the supplement of the missing angle.



**13. Justify Conclusions** Construct an argument to explain why it is possible for a triangle to contain three acute angles.

---

---

---

---

---

---

**14.** Draw a triangle with one angle greater than  $90^\circ$  and no congruent sides. Then classify the triangle.

---

---

---

---

---

---

مجلس 4



مؤسسة الإمارات للتعليم المدرسي  
EMIRATES SCHOOLS ESTABLISHMENT

**Part (2)**

**10 main questions**

5 Marks per main question

**MCQ**



Use the Distributive Property to expand each expression.

**9.**  $2(-3x + 5)$

---

---

---

---

---

---

---

---

**10.**  $6(-4x + 3y)$

---

---

---

---

---

---

---

---

**11.**  $(3y - 2z)5$

---

---

---

---

---

---

---

---

Use the Distributive Property to expand each expression.

**12.**  $(-2x - 7)4$

---

---

---

---

---

---

---

---

**13.**  $-7(x - 2)$

---

---

---

---

---

---

---

---

**14.**  $-3(8x - 4)$

---

---

---

---

---

---

---

---



Add.

4.  $(-3x - 9) + (4x + 8)$

---

---

---

---

---

---

---

5.  $(-5x + 4) + (-9x - 3)$

---

---

---

---

---

---

---

6.  $(-2x + 10) + (-8x - 1)$

---

---

---

---

---

---

---

Add.

**7.**  $\left(\frac{1}{4}x - 3\right) + \left(\frac{3}{16}x + 5\right)$   

---

---

---

---

---

---

---

**8.**  $\left(\frac{1}{2}x - 3\right) + \left(\frac{1}{6}x + 1\right)$   

---

---

---

---

---

---

---

**9.**  $\left(4x + \frac{3}{4}\right) + \left(-3x - \frac{5}{12}\right)$   

---

---

---

---

---

---

---

Solve each equation. Check your solution.

7.  $\frac{d}{-9} = -6$

---

---

---

---

---

---

---

---

8.  $15 = \frac{z}{-8}$

---

---

---

---

---

---

---

---

9.  $2\frac{4}{5}x = -1\frac{1}{4}$

---

---

---

---

---

---

---

---

Solve each equation. Check your solution.

**10.**  $-6 = \frac{3}{5}y$

---

---

---

---

---

---

---

---

**11.**  $-6 = 0.2b$

---

---

---

---

---

---

---

---

**12.**  $-0.8n = 2.8$

---

---

---

---

---

---

---

---

**5.** A hot air balloon is at an altitude of  $100\frac{1}{5}$  yards. The balloon's altitude decreases by  $10\frac{4}{5}$  yards every minute. Determine the number of minutes it will take the balloon to reach an altitude of 57 yards.

---

---

---

---

---

---

**6.** The current temperature is  $48^{\circ}\text{F}$ . It is expected to drop  $1.5^{\circ}\text{F}$  each hour. Determine in how many hours the temperature will be  $36^{\circ}\text{F}$ .

---

---

---

---

---

---

**7.** Mariko and her friend spent \$24.50 on lunch. Their lunches cost the same amount, and they used a \$4 off coupon. Determine the cost of each lunch.

---

---

---

---

---

---

---

---

Solve each equation. Check your solution.

1.  $4(x + 8) = 44$

---

---

---

---

---

---

---

---

2.  $7(x + 8) = 49$

---

---

---

---

---

---

---

---

3.  $-2(x + 4) = 18$

---

---

---

---

---

---

---

---

Solve each equation. Check your solution.

4.  $10(x - 5) = -80$

---

---

---

---

---

---

---

---

5.  $-5(x - 10) = -35$

---

---

---

---

---

---

---

---

6.  $-9(x - 4) = 81$

---

---

---

---

---

---

---

---



Solve each inequality. Graph the solution set on a number line.

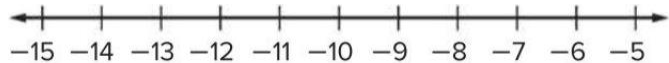
**1.**  $-6x > 66$

---

---

---

---



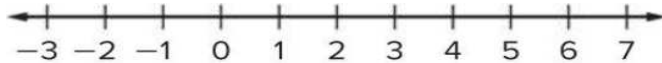
**2.**  $-12 \leq -3x$

---

---

---

---



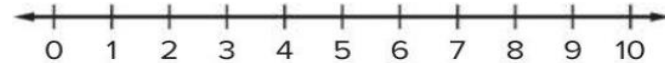
**3.**  $-4x \geq -36$

---

---

---

---

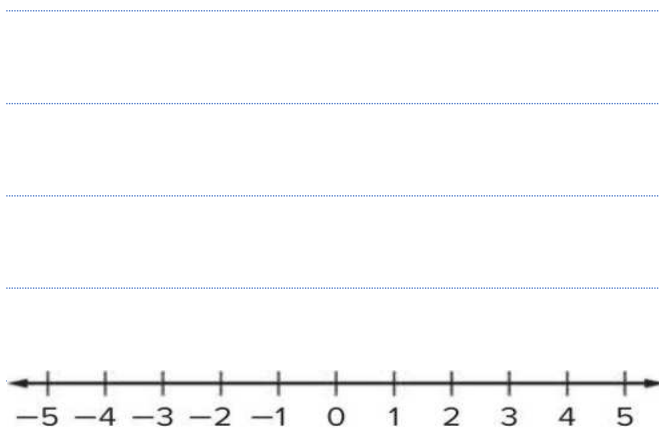


Solve each inequality. Graph the solution set on a number line.

4.  $3 > -0.4x$



5.  $-2.2x \leq -6.6$



6.  $\frac{x}{-8} > 2$



Solve each inequality. Graph the solution set on a number line.

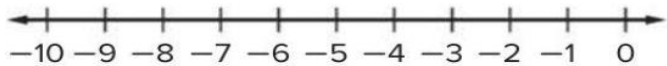
1.  $-3x - 3 > 12$

---

---

---

---



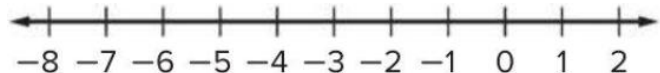
2.  $-4 \leq 4x + 8$

---

---

---

---



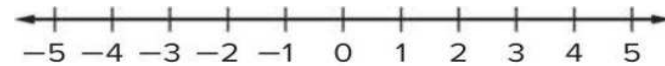
3.  $6.5x - 11.3 \leq 8.2$

---

---

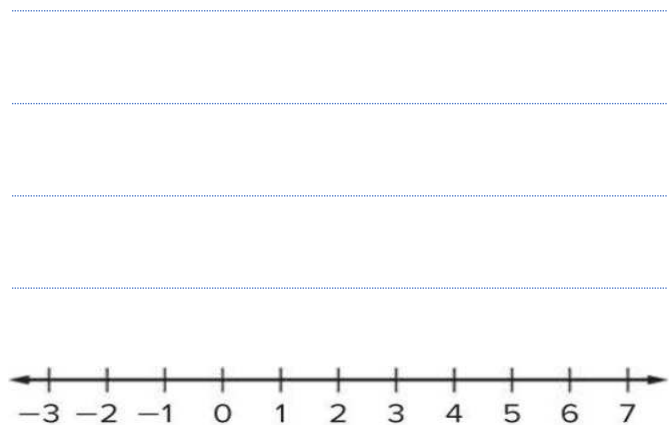
---

---

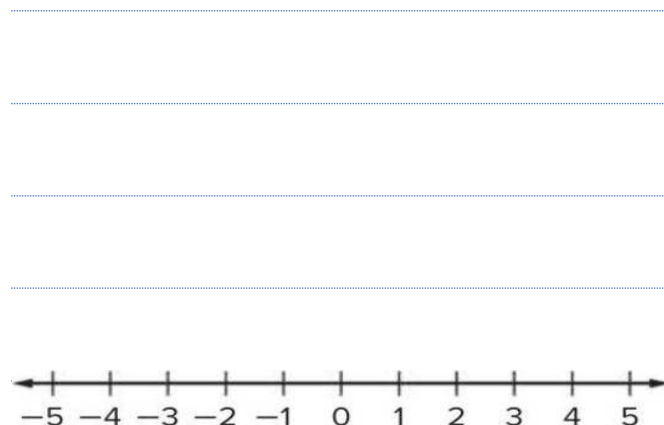


Solve each inequality. Graph the solution set on a number line.

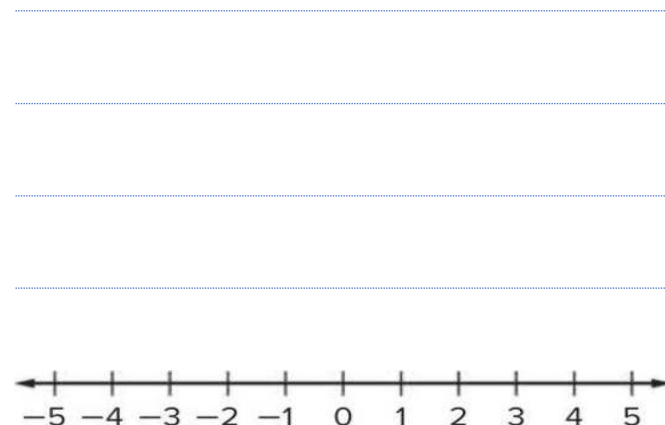
4.  $-2.45x + 3.2 < -6.6$



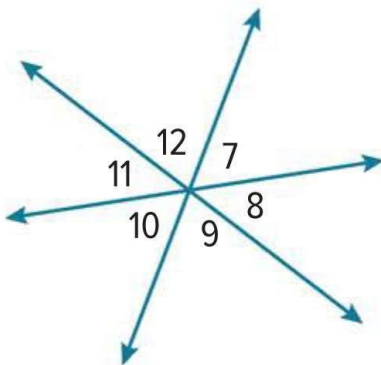
5.  $\frac{1}{2}x - \frac{1}{4} \leq \frac{5}{8}$



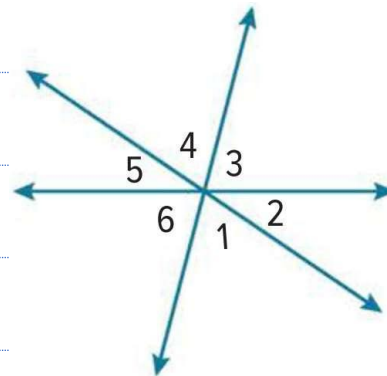
6.  $\frac{x}{10} + \frac{1}{4} \geq \frac{1}{5}$



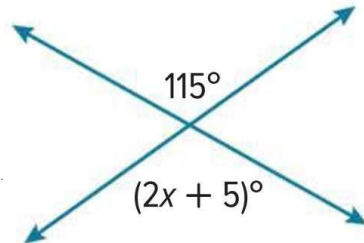
3. Refer to the diagram below. Identify three pairs of vertical angles. Name all the angles that are adjacent to  $\angle 10$



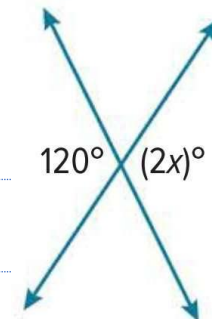
4. Identify three pairs of vertical angles. Name all the angles that are adjacent to  $\angle 3$ .



5. Write and solve an equation to find the value of  $x$ .

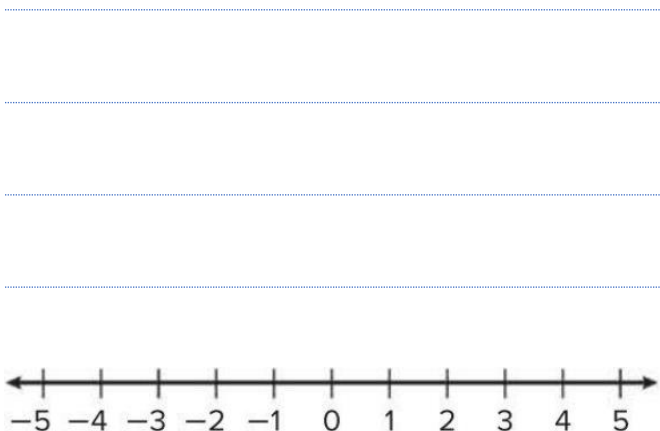


6. Write and solve an equation to find the value of  $x$ .

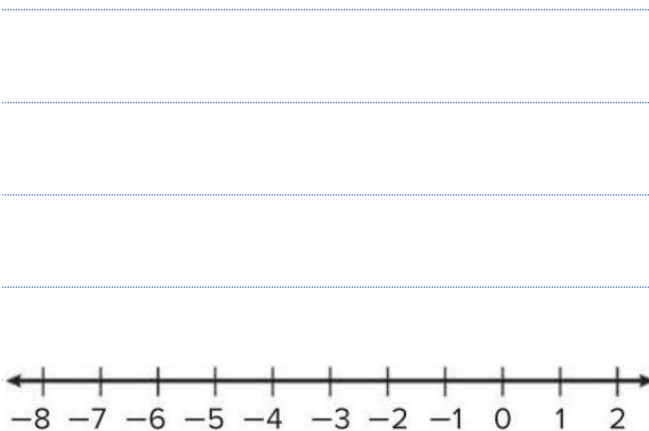


Solve each inequality. Graph the solution set on a number line.

**1.**  $x + 5 < 7$



**2.**  $1 > x + 6$



**3.**  $x + 8 \geq 14$



Solve each inequality. Graph the solution set on a number line.

4.  $5 \leq x + 12$



5.  $x + 5.4 < -1.6$



6.  $x + 7.5 > -2.5$





Solve each problem by first writing an inequality.

**1.** Gabe went to the amusement park with \$40 to spend. His ticket cost \$26.50. Determine how much Gabe can spend on souvenirs and snacks. Then interpret the solution.

---

---

---

---

---

---

---

---

**2.** Drew practices piano at least 45 minutes per day. He has already practiced 18.5 minutes today. Determine how much longer he will have to practice. Then interpret the solution.

---

---

---

---

---

---

---

---

Solve each problem by first writing an inequality.

**3.** dolphin is swimming at a depth of  $-50$  feet and then ascends a certain number of feet to a depth above  $-35$  feet. Determine the number of feet the dolphin ascended. Then interpret the solution.

---

---

---

---

---

---

**4.** Elena's account balance with her parents is  $-\$5.50$ . she adds a certain amount of money to her balance by mowing the lawn. Elena now has an account balance less than  $\$20$ . Determine a possible amount she earned mowing the lawn. Then interpret the solution.

---

---

---

---

---

---

## Part (3)

### 3 main questions

(6-8) Marks per main question

FRQ



Simplify each expression. For Exercises 1 – 4, write your answer in factored form.

**1.**  $3(x + 4) + 5x$

---

---

---

---

---

---

---

---

**2.**  $-4(x + 1) + 6x$

---

---

---

---

---

---

---

---

**3.**  $-5(2x - 6) + 25x$

---

---

---

---

---

---

---

---

Simplify each expression. For Exercises 1 – 4, write your answer in factored form.

4.  $2(-8x - 3) + 18x$

---

---

---

---

---

---

---

5.  $\frac{1}{6}x + \frac{3}{4}\left(\frac{1}{2}x - 4\right)$

---

---

---

---

---

---

---

6.  $\frac{2}{3}\left(6x - \frac{1}{6}\right) + 3x$

---

---

---

---

---

---

---

Subtract.

4.  $(8x + 9) - (6x - 2)$

---

---

---

---

---

---

---

5.  $(3x - 4) - (x - 5)$

---

---

---

---

---

---

---

6.  $(3x - 4) - (x - 5)$

---

---

---

---

---

---

---

Subtract.

7.  $(-7x - 14) - (x - 5)$

---

---

---

---

---

---

---

8.  $(-7x - 14) - (x - 5)$

---

---

---

---

---

---

---

9.  $\left(\frac{3}{5}x + \frac{3}{4}\right) - \left(\frac{1}{3}x - \frac{1}{8}\right)$

---

---

---

---

---

---

---

Solve each equation. Check your solution.

1.  $4(x + 8) = 44$

---

---

---

---

---

---

---

---

2.  $7(x + 8) = 49$

---

---

---

---

---

---

---

---

3.  $-2(x + 4) = 18$

---

---

---

---

---

---

---

---



Solve each equation. Check your solution.

4.  $10(x - 5) = -80$

---

---

---

---

---

---

---

---

5.  $-5(x - 10) = -35$

---

---

---

---

---

---

---

---

6.  $-9(x - 4) = 81$

---

---

---

---

---

---

---

---

Solve each equation. Check your solution.

**7.**  $0.4(x - 7) = 18$

---

---

---

---

---

---

---

---

**8.**  $-0.25(8 + x) = 14$

---

---

---

---

---

---

---

---

**9.**  $-0.8(10 - x) = 36$

---

---

---

---

---

---

---

---